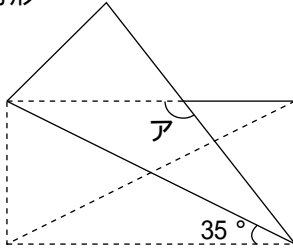
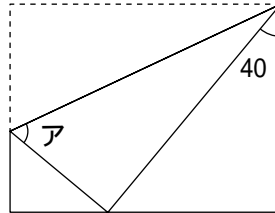


次の図はいろいろな図形を折り返したものです。アの角の大きさを求めなさい。

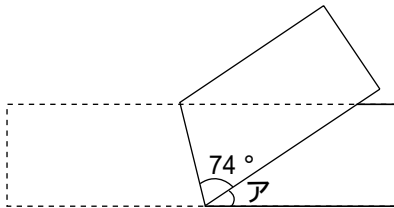
(1) 長方形



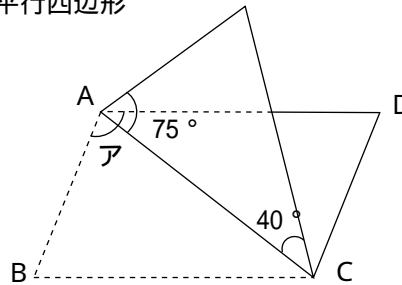
(2) 長方形



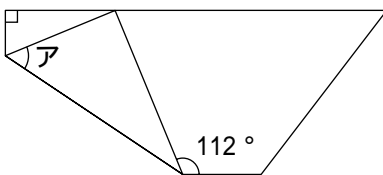
(3) 長方形



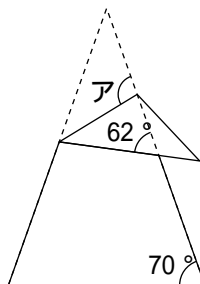
(4) 平行四辺形



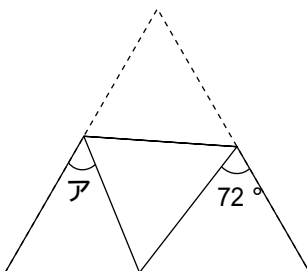
(5) 台形



(6) 二等辺三角形



(7) 正三角形



(1)
(2)
(3)
(4)
(5)
(6)
(7)