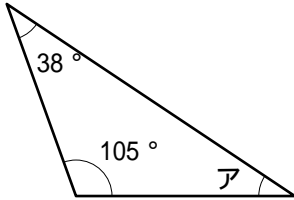
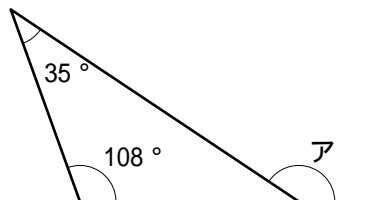


1 次の図のアの角の大きさをそれぞれ求めなさい。

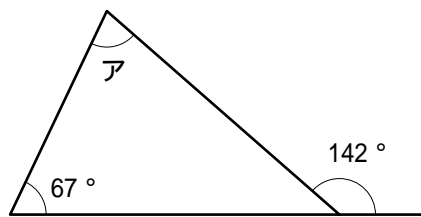
(1)



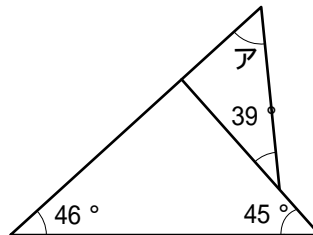
(2)



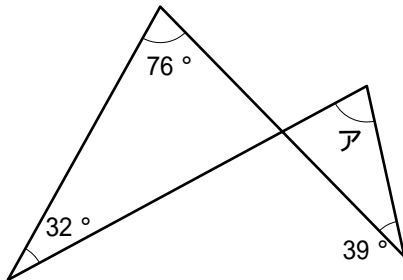
(3)



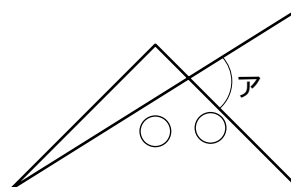
(4)



(5)



2 1組の三角定規を下図のように重ねました。アの角の大きさを求めなさい。



(1)	°
(2)	°
(3)	°
(4)	°
(5)	°

°
---