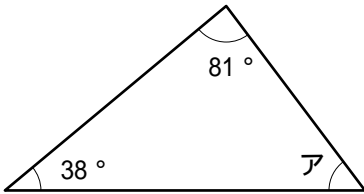


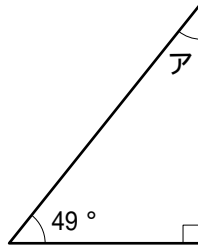


1 次の図のアの角度をそれぞれ求めなさい。

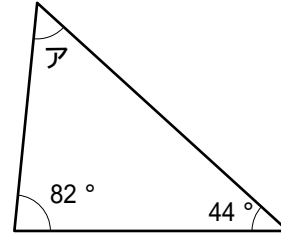
(1)



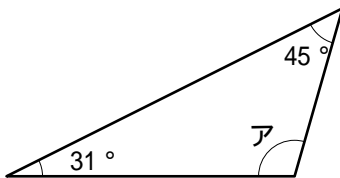
(2)



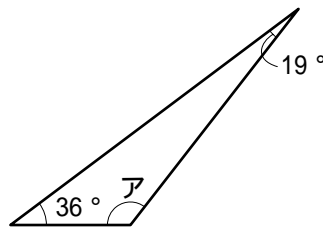
(3)



(4)



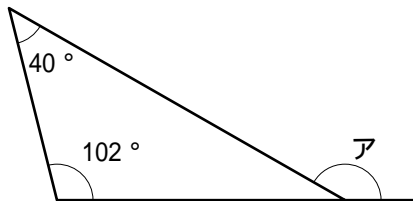
(5)



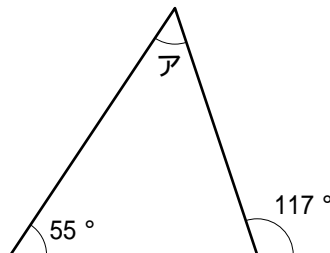
(1)	°
(2)	°
(3)	°
(4)	°
(5)	°

2 次の図のアの角度をそれぞれ求めなさい。

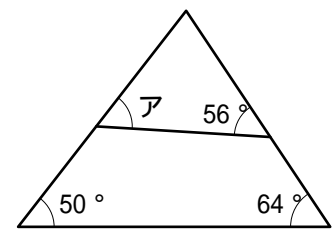
(1)



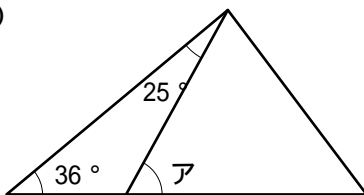
(2)



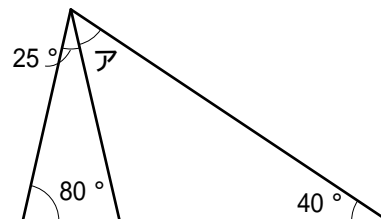
(3)



(4)



(5)



(1)	°
(2)	°
(3)	°
(4)	°
(5)	°